

- The speaker of these lines points out that present day youth.
- A) Do not want to be different
 B) Want to trail the beaten track
 C) Do not wish to exhibit their hidden potentialities
 D) Are capable of working wonders
- Q.36. Which of the following poem does not picture childhood memories?
 A) A Sonnet for my incomparable mother
 B) Sonnet – 116
 C) Piano
 D) Paper boat
- Q.37. Pick out the poem which is written by Ralph Waldo Emerson
 A) The Apology B) With a friend
 C) Snake D) Women’s rights
- Q.38. Fill in the blank choosing the correct option:
 The pen-name of Hector Hugh Munro is ----
 A) H.H. Munro B) Saki
 C) Hugh D) Saghi
- Q.39. “No walls for me, No vigil gates, No flags, no machine guns that blast” Whose words are these?
 A) Walt Whitman B) H.W. Longfellow
 C) D.H. Lawrence D) Famida Y. Basheer
- Q.40. The author of the story, The Mark of Vishnu’. Khuswant Singh belongs to which state
 Choose the option.
 A) Kerala B) Tamil Nadu
 C) Karnataka D) Punjab
- Q.41. What is the significance of the following day 5th June?
 A) World Health Day
 B) World Peace Day
 C) World Integration Day
 D) World Environment Day
- Q.42. Match the poems with the poets
- | | |
|------------------------|------------------------|
| A) A Noiseless patient | 1. Annie Lousia Walkar |
| spider | |
| B) A Tiger in the Zoo | 2. James Kirkup |
| C) No men are foreign | 3. Leslie Norris |
| D) Women’s Rights | 4. Walt Whitman |
- | | | | |
|------|---|---|---|
| a | b | c | d |
| A) 4 | 3 | 2 | 1 |
| B) 4 | 2 | 3 | 1 |
| C) 4 | 1 | 2 | 3 |
| D) 3 | 1 | 2 | 4 |
- Q.43. “I’m not a mere ball of mud, water and minerals, I too possess a body and mind, a heart and soul-just like you”
 Whose words are these?
 A) The Mountain B) The River
 C) The Ocean D) The Earth
- Q.44. Match the poem with the poet.
- | | |
|----------------------------|------------------------------|
| A) With a Friend | 1. Paul Holmes |
| B) Migrant Bird | 2. Vivian Gould |
| C) The cry of the children | 3. Famida Y. Basheer |
| D) Beautiful Inside | 4. Elizabeth Barret Browning |
- | | | | |
|------|---|---|---|
| a | b | c | d |
| A) 3 | 2 | 1 | 4 |
| B) 2 | 3 | 4 | 1 |
| C) 4 | 3 | 2 | 1 |
| D) 1 | 4 | 3 | 2 |
- Q.45. Name the poem in which the following lines appear.
 “A mirror of his changing moods
 Now Sure, now steeped in thought”
 A) No men are Foreign
 B) Shilpi
 C) Don’t Quit
 D) My Grandmother’s House
- Q.46. Match column A with B, and select the correct answer from the codes given
- | | |
|------------------------------|----------------|
| Column A | Column B |
| A) International + Police | 1. Moped |
| B) Education + Entertainment | 2. Electrocute |
| C) Motor + Pedal cycle | 3. Interpol |
| D) Electro + execute | 4. Edutainment |
- | | | | |
|------|---|---|---|
| a | b | c | d |
| A) 3 | 4 | 1 | 2 |
| B) 3 | 1 | 2 | 4 |
| C) 3 | 1 | 4 | 2 |
| D) 3 | 4 | 2 | 1 |
- Q.47. Her friends remember how she incessantly Talked about designing and flying planes.
 Select the correct antonym for the underlined Word from the given options:
 A) Occasionally B) Often
 C) Always D) Usually
- Q.48. A mirror of his changing moods
 Mention the figure of speech employed in this line
 A) Simile B) Allusion
 C) Anaphora D) Metaphora

- Q.49. Love's not time's fool, though rosy lips and cheeks within his bending sickle's compass come.
These lines refer to the -----
A) Destructive power of love
B) Destructive power of time
C) Permanency of external beauty
D) Constructive power of beauty
- Q.50. Where the world has not been broken up into fragments by narrow domestic walls
What world does the poet dream of?
A) Broken world with fragmented walls
B) Unbroken world with fragmented walls
C) The world without fragmented domestic walls
D) Broken world with narrow minded people
- Q.51. As students – their attitude towards the government of the country, such as it may be good, bad or indifferent, should be one of acquiescence, loyal acquiescence”
What should be the students attitude towards government?
A) Aggressive
B) Supportive without protest
C) Unfriendly
D) Non-cooperative
- Q.52. “Oh, my god! I could not make out why he was so interested to know all about you”
What is the equivalent meaning for the underlined phrasal verb?
A) Understand B) Say
C) Find D) Think
- Q.53. Identify the sentence pattern.
The crowd cheered him lustily.
A) SVGA B) SVOC
C) SVAA D) SVOA
- Q.54. Select the correct voice.
Which of the following options has a sentence with the verb in the active voice?
A) The exhibition was opened by the Governor
B) The dog chased the sheep
C) Nothing will be gained by hurry
D) The thief was caught
- Q.55. Select the correct tense.
She is singing now.
A) Simple Present Tense
B) Present Continuous Tense
C) Present Perfect Tense
D) Present Perfect Continuous Tense
- Q.56. Match the following words and phrases given in column A with their meanings in column B and select the correct answer from the codes given below:
- | Column A | | Column B | |
|---------------|---|-------------------|---|
| A) call for | | 1. Take care of | |
| B) break for | | 2. Improve | |
| C) pick up | | 3. Start suddenly | |
| D) look after | | 4. demand | |
| a | b | c | d |
| A) 3 | 4 | 1 | 2 |
| B) 4 | 2 | 3 | 1 |
| C) 4 | 3 | 2 | 1 |
| D) 2 | 4 | 3 | 1 |
- Q.57. Identify the sentence with adverb
A) That day he arrived late
B) Generally speaking, we receive what we deserve
C) The sweet mango is fit to eat
D) Everybody wishes to enjoy life
- Q.58. Identify the sentence pattern
Friends, Romans, Countrymen, lend me your ears.
A) SVO B) SVOA
C) SVIODO D) SVOC
- Q.59. “Was out of work-had sold his traps”
The word “traps” in this line means
A) Two-wheeled bullock carts
B) Two-wheeled tractor
C) Two-wheeled horse carriage
D) Two-wheeled bicycle
- Q.60. Tell me not, in mournful numbers
‘Numbers’ here refer to
A) Even numbers B) Fractional numbers
C) Rhythmic metres D) Odd numbers
- Q.61. “And in the hush we joined to make we heard,
we kenw we heard the brook”
In which poem do these lines occur?
A) The Apology B) The Brook
C) English words D) Going for water
- Q.62. Fill in the blank with the correct option.
Dr. Salim Ali is an _____
A) Ornithologist B) Ophthalmologist
C) Opportunist D) Oncologist
- Q.63. “You must tell him to be sure and come here tomorrow”
Who said this to whom in “The selfish giant”?
A) The giant said this to be children
B) The children said this to the giant

- C) The giant said this to the little boy
D) The giant said this to his friend
- Q.64. Life is but an empty dream!
This line is an extract from the poem.
A) Hopes and Dreams B) Is life, but a dream
C) A Psalm of life D) Laugh and be merry
- Q.65. A child sitting under the Piano, in the boom of the tingling strings.
The Figure of speech in the above underlined phrase is
A) Simile B) Metaphor
C) Onomatopoeia D) Personification
- Q.66. What is the theme highlighted in the lesson, 'The Mark of Vishnu'?
A) Patriotism B) Friendship
C) Integration D) Superstition
- Q.67. "Any Tradition, however ancient, if inconsistent with morality, is fit to be banished from the land. Untouchability may be considered an ancient tradition.
These words are said by
A) Pandit Jawaharlal Nehru
B) Gokhale
C) Gandhiji
D) Raja Ram Mohan Roy"
- Q.68. Pick out the title that does not belong to the writer Pearl S. Buck
A) The Good Earth B) My Several Worlds
C) Far and Near Stories D) The Last Leaf
- Q.69. "The brave little voyagers face many dangers and hardships while travelling long, long distances"
Who are the brave little Voyagers?
A) Cricketers B) Butterflies
C) Children D) Birds
- Q.70. Choose the correct sequence of articles that would complete the passage, from the options given.
-----days went by with no one showing up to claim -
----- dog. When Goldy was feeling all better. We played Frisbee and football in ----- yard. He was -----
----- very smart dog.
A) a the the a B) the a the a
C) the the the a D) a a the a
- Q.71. Choose the appropriate answer for the noun + verb pattern
A) Chessmen B) Knee deep
C) Sunset D) Iron box
- Q.72. Choose the appropriate answer

- The _____ in Italy are dangerous.
A) Volcano B) Volcanoes
C) Volcanos D) Volcanose
- Q.73. I have no advice to offer you
A) Simple B) Compound
C) Complex D) None of the above
- Q.74. For Brutus is an honorable man.
Which poetic device is used by Shakespeare in this line?
A) Irony B) Euphemism
C) Diction D) Epithet
- Q.75. You let me play once in your garden today you shall come with me to my garden.
The Giant's final journey was to
A) the paradise
B) his friend's palace
C) the king's palace
D) the neighbouring village
- Q.76. The knocking softens, fades to a maid judicious tap.
What is the knocking sound?
A) Knocking at the door B) Carving of the statue
C) Hitting the ball D) Boxing at the nose
- Q.77. My austere father used to avoid all in essential comforts and luxuries. This means -----
A) Dr. Kalam's father preferred a luxurious life style
B) Dr. Kalam's father preferred a lavish life style
C) Dr. Kalam's father preferred a simple life style
D) Dr. Kalam's father preferred all comforts in his life
- Q.78. Pick out the sentence – where "like" is used as preposition.
A) We shall not see the like of Gandhiji again
B) Today Ang San Suu Kyi fights like Gandhiji
C) Many wanted to be like him
D) I like Gandhiji
- Q.79. I was weary to the last extent,
Select the correct antonym for the underlined word from the options given below.
A) tired B) drained
C) brisk D) inactive
- Q.80. Select the correct sentence from the following:
A) Veena was the cleverest girl in the class
B) Babu is the most poor boy in the class
C) The girls are active than boys
D) She went home most disappointed than her Friends

- A) do they? B) don't they?
 C) do you? D) don't you?

Q.95. Fill in the blank with a suitable preposition. Ravi stayed with his uncle ----- six months.

- A) for B) since
 C) at D) in

Q.96. Identify the sentence

Night came on and the room grew dark

- A) Simple B) Compound
 C) Complex D) Interrogative

Q.97. "I could then see my reflection in the window and in the retina of my eye the whole earth and sky could be seen, reflected"

Who is the speaker?

- A) Helen Keller B) Sunita Williams
 C) Dr. A.P.J. Abdul Kalam D) Kalpana Chawla

Q.98. "You must prepare your bosom for his knife"

Here 'you' refers to -----

- A) Antonio B) Bassanio
 C) Portia D) Shylock

Q.99. Had you rather Caesar were living, and die all slaves -----?

Select the most accurate of the four given contexts for the above questions

- A) Caesar would not have enslaved his country men, if he had been alive.
 B) Caesar would have enslaved his country men if he had been alive
 C) Caesar would have made his country men free if he had been alive
 D) Caesar would have killed his country men if he had been alive

Q.100. "It is an attribute to god himself"

Identify the speaker of the given line.

- A) Macbeth B) Portia
 C) Nerrisa D) Jessica

Q.101. The 5th term in the series $\frac{2}{5}, \frac{6}{25}, \frac{18}{125}, \dots$ is

- A) $\frac{162}{625}$ B) $\frac{81}{3125}$
 C) $\frac{54}{625}$ D) $\frac{162}{3125}$

Q.102. Find the missing number.

25	7	18
----	---	----

35	13	22
45	8	?

- A) 22 B) 37
 C) 28 D) 17

Q.103. Match the following:

- | | |
|------------------------------------|--|
| A) Tax on income | 1. Non tax revenue of State Government |
| B) Sales tax | 2. Tax revenue of Central Government |
| C) Interest receipts from railways | 3. Non tax revenue of Central Government |
| D) Court fees | 4. Tax revenue of State Government |

- | | | | | |
|----|---|---|---|---|
| | a | b | c | d |
| A) | 2 | 4 | 3 | 1 |
| B) | 1 | 3 | 2 | 4 |
| C) | 1 | 2 | 4 | 3 |
| D) | 4 | 3 | 1 | 2 |

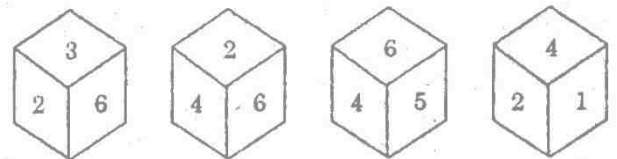
Q.104. Which among the following sectors has the largest contribution to the Gross Domestic Savings in India?

- A) Public sector B) Private sector
 C) Un organised sector D) Household sector

Q.105. Which of the following statements about Blue Green Algae is/are true?

- I. The cells of Blue Green Algae are Prokaryotic.
 II. The storage food product of Blue Green Algae is Laminarin.
 III. The membrane bound plastids are absent in the cells of Blue Green Algae.
 IV. Flagella are absent in Blue Green Algae.
 A) II and IV B) I and II
 C) II and III D) I, III and IV

Q.106. Consider the following dice



What is opposite to 3?

- A) 1 B) 4
 C) 5 D) 2

Q.107. Which is wrongly matched?

- I. The Santhal's Rebellion 1855
 II. Moplah Rebellion, 1921
 III. Vellore Mutiny, 1806

IV. Barrackpore Sepoys Mutiny, 1804

- A) I only B) II only
C) III only D) IV only

Q.108. Arrange the following events in descending order.

- I. Home Rule League at Poona.
II. Conclusion of Kakori Case
III. Murder of S.P. Saunder
IV. Punjab Governments deportation order of Dr. Satyapal and Dr. Kitchlew

- A) I, IV, II, III B) III, II, IV, I
C) IV, III, I, II D) I, III, II, IV

Q.109. Match List I with List II and select the correct answer using the codes given below the lists.

- | | | | |
|---------------|--|-------------------|--|
| List I | | List II | |
| Mineral Ore | | Mineral extracted | |
| A) Magnetite | | 1. Mica | |
| B) Casserite | | 2. Coal | |
| C) Anthracite | | 3. Iron | |
| D) Muscovite | | 4. Tin | |

- | | | | |
|------|---|---|---|
| a | b | c | d |
| A) 4 | 1 | 3 | 2 |
| B) 2 | 3 | 1 | 4 |
| C) 3 | 2 | 4 | 1 |
| D) 3 | 4 | 2 | 1 |

Q.110. In the Provincial Towns such as Chennai, Mumbai, Calcutta and Delhi, which of the following is fixing the value of the cases in the courts of small causes from time to time.

- A) The Provincial Town Authorities
B) The District Collector
C) The High Court
D) The State Government

Q.111. Supreme Court of India is considered as possessing larger powers than the Supreme Court of USA. Why?

- A) Indian Supreme Court is not only a Federal Court and the guardian of the constitution and as well as highest court of appeal.
B) American Supreme Court is not having power to entertain appeals from tribunals
C) Supreme Court of India has advisory Jurisdiction which the American Supreme.
D) Because of all the above.

Q.112. A bullet of mass 150 gm strikes a target at 600 m/s velocity which is reduced to 150 m/s. The loss of energy is

- A) 3000 J B) 8437 J

- C) 18400 J D) 5400 J

Q.113. In the following cross between parents, a child with B blood group is not possible why?

	A	A
B	AB	AB
b	Ab	Ab

- A) Because one parent is A homozygous dominant to the other is B heterozygous. Children with recessive b will becomes A because A is dominant. If the parent with A blood group is heterozygous dominant, then only child with 'B' blood group is possible.
B) Because parent with blood group 'B' is heterozygous
C) Because parent with blood group 'AB' is homozygous
D) Because parent with blood group 'B' is homozygous

Q.114. If $x=y=3:4$, find $(4x+5y) = 5x-2y$

- A) $\frac{31}{7}$ B) $\frac{32}{7}$
C) $\frac{33}{7}$ D) $\frac{7}{32}$

Q.115. A and B can together finish a work in 30 days. They worked at it for 20 days and then B left. The remaining work was done by A alone in 20 more days. A alone can finish the work in

- A) 48 days B) 50 days
C) 54 days D) 60 days

Q.116. If the side of a square is increased by 5 cm, then the area increases by 165 sq.cm. The side of the square is

- A) 13 cm B) 14 cm
C) 33 cm D) 12 cm

Q.117. What will be 60% of a number whose 300% is 120?

- A) 12 B) 24
C) 36 D) 48

Q.118. Consider the following statements and select your answers:

- Assertion (A) : Jainism had more influence than Buddhism on the life of the people in Tamilnadu.
Reason (R) : Jainism had much more in common with Hinduism than Buddhism.

- A) (A) and (R) are true but (R) is not correct explanation of (A)
 B) (A) is true, but (R) is not true
 C) (A) is not true, but (R) is true
 D) (A) is true and (R) is correct explanation of (A)

Q.119. Consider the following statements and select your answers:

Assertion (A): The age of consent bill was a remarkable achievement of Behramji Malabari.

Reason (R) : The Bill created an indissoluble bond between social reform, and national movement.

- A) (A) and (R) are true but (R) is not correct explanation of (A)
 B) (A) and (R) are true but (R) is correct explanation of (A)
 C) (A) is true, but (R) is not true
 D) (A) is not true, but (R) is true

Q.120. Auditing the Governmental expenditure is vested with the

- I. The Finance Minister
 II. The Prime Minister
 III. The Finance Secretary
 IV. Comptroller and Auditor General

- A) I only B) II only
 C) II and III only D) IV only

Q.121. Find out the pair of wrongly matched water dispute tribunals.

- I. Krishna water - Maharashtra, Karnataka and Andhra Pradesh
 II. Narmatha water - Rajasthan, Gujarat, Maharashtra and Madhya Pradesh
 III. Kavery water - Karnataka, Kerala, Goa and Tamil Nadu
 IV. Ravi and Beas Water - Punjab and Haryana

- A) I only B) II and IV
 C) III only D) IV only

Q.122. Match the List I with List II and select the correct answer using the codes given below the List:

- A) MGNREGA 1. To upgrade housing for BPL, SC/ST
 B) SGSY 2. For benefit of rural women
 C) IAY 3. Guaranteed wage employments for at least 100 days

D) IMY

4. For improving the family income of rural poor

- | | a | b | c | d |
|----|---|---|---|---|
| A) | 1 | 2 | 3 | 4 |
| B) | 3 | 2 | 4 | 1 |
| C) | 3 | 4 | 1 | 2 |
| D) | 3 | 1 | 2 | 4 |

Q.123. What is 'Kinect'?

- I. Depth camera systems
 II. Projector
 III. Remote control for T.V.
 IV. Message boards

- A) I only B) I and II only
 C) III only D) IV only

Q.124. Cancer immunologist James Allison is mainly associated with

- I. CTLA-4 II. CARE
 III. PD-1 IV. Erased tumours in mice

- A) I only B) III and IV only
 C) II only D) I and IV only

Q.125. Find $\sqrt{74 + \sqrt{44 + \sqrt{22 + \sqrt{5 + \sqrt{16}}}}}$

- A) 5 B) 7
 C) 6 D) 9

Q.126. A certain sum of money lent out at simple interest amounts to Rs. 690 in 3 years and Rs. 750 in 5 years. The sum lent is

- A) Rs. 400 B) Rs. 450
 C) Rs. 500 D) Rs. 600

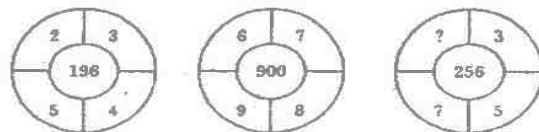
Q.127. For any two natural numbers p and q we define the operators \wedge, \vee as follows

$$p \wedge q = p^2 + q^2; p \vee q = p^2 - q^2$$

then the value of $(5 \vee 2) \wedge 25$ is

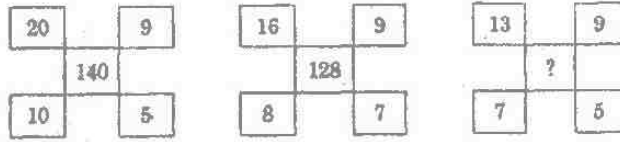
- A) - 184 B) - 525
 C) 1066 D) 46

Q.128. Find the missing number.



- A) 4 B) 3
 C) 2 D) 1

Q.129. Find the missing number in the following diagram.



- A) 82 B) 96
C) 72 D) 84

Q.130. Demographic dividend refers to

- A) a greater proportion of population in the working age group of 15 – 64
B) a higher percentage share of dependents to working age population
C) getting more employment opportunities for the youth.
D) a stable and balanced population

Q.131. The A, B, O blood grouping was first discovered by

- A) Landsteiner and Levine B) Muller H.J.
C) Morgan D) Weiner

Q.132. One of the main sources of vitamin ‘C’ is

- A) Citrus-fruits (lemon) B) Eggs
C) Banana D) Milk

Q.133. The L.C.M. of $2^3 \times 3^2 \times 5 \times 11$, $2^4 \times 3^4 \times 5^2 \times 7$, $2^5 \times 3^3 \times 5^3 \times 7^2 \times 11$

- A) $2^5 \times 3^4 \times 5^3$ B) $2^5 \times 3^4 \times 5^3 \times 7^2 \times 11$
C) $2^3 \times 3^2 \times 5 \times 7 \times 11$ D) $2 \times 3 \times 5 \times 11 \times 7$

Q.134. The next number 3, 9, 27, _____

- A) 45 B) 61
C) 72 D) 81

Q.135. If the C.I. on a certain sum for 3 years at 10% per annum be Rs. 331. What would be the simple interest?

- A) Rs. 3,000 B) Rs. 300
C) Rs. 30 D) Rs. 30,000

Q.136. Find out the wrong statement among the following:

- Bharathi acclaimed Gandhi as Mahatma even before Tagore in 1910.
- He burnt foreign cloths at Madras Coast in 1906.
- He was exiled to Pondicherry from 1908 to 1918.
- Sub-editor of Swadesamitran in 1904.

- A) 1 and 2 B) 2 and 4
C) 3 only D) 1 and 4

Q.137. Match List I with List II and select the correct answer using the codes given below the lists.

- | | |
|-----------|------------------------------------|
| List I | List II |
| A) Manaus | 1. Mid latitude arid and semi arid |

- | | | | |
|--------------|--------------------------|---|---|
| B) Valpariso | 2. Rainy Tropic | | |
| C) Chennai | 3. Dry summer sun tropic | | |
| D) Denever | 4. Wet and dry tropic | | |
| a | b | c | d |
| A) 3 | 4 | 1 | 2 |
| B) 2 | 3 | 4 | 1 |
| C) 4 | 2 | 1 | 3 |
| D) 2 | 1 | 3 | 4 |

Q.138. Which of the following is true?

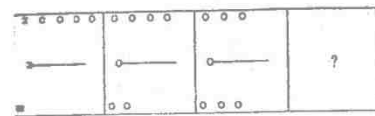
- I. President of India nominate 12 members to the Rajya Sabha
II. In United States there is no such nominated members to the Senate.
- A) I is true B) II is true
C) I is true but II is wrong D) I and II are true

Q.139. Consider the following statements.

- Assertion (A) : The executive and the legislature of the Union shall have extraordinary powers during an Emergency.
Reason (R) : The Union Executive has the power to give directions to a State only to matters specified in Art 256 -257

- A) Both (A) and (R) are individually true and (R) is the correct explanation of (A)
B) Both (A) and (R) are individually true but (R) is not a correct explanation of (A)
C) (A) is true but (R) is false
D) (A) is false but (R) is true

Q.140.



- A) B) C) D)

Q.141. Match the List I with List II using the codes given below:

- | | |
|---|-----------------------|
| I | II |
| A) Agriculture, Forestry and Fishery | 1. Unorganized sector |
| B) Mining, Manufacturing Electricity Gas and Water Supply | 2. Service Sector |
| C) Trade, Transport and | |

Communication	3. Secondary sector		
D) Unincorporated			
Enterprises and House			
Hold industries	4. Primary sector		
a	b	c	d
A) 1	2	3	4
B) 4	3	2	1
C) 2	4	1	3
D) 3	4	1	2

Q.142. Arrange the annexation of states under the Doctrine of Lapse in chronological order and select the codes given below.

- | | |
|-------------------|-------------------|
| I. Jaipur | II. Udaipur |
| III. Jhansi | IV. Satara |
| A) II, I, III, IV | B) III, II, I, IV |
| C) I, III, II, IV | D) II, III, IV, I |

Q.143. The European Union's executive on 27 July 2016 appointed ----- as its Chief Negotiator for the UK's exit from the bloc.

- | | |
|-------------------|------------------|
| A) Mario draghi | B) Didier Seeuws |
| C) Michel Barnier | D) Koen Lenaerts |

Q.144. Arjuna Award is India's second highest sporting award bestowed sportsperson for consistently outstanding performance for-----.

- | | |
|------------|------------|
| A) 2 years | B) 4 years |
| C) 6 years | D) 8 years |

Q.145. Which one of the following term is not related to the option 'NOTA' in the voting system?

- A) Against all
 B) Negative vote
 C) Disapproval of all the candidate
 D) Invalid vote

Q.146. Who was honoured with the 2016 Sustainable Development Leadership Award?

- | | |
|-------------------|----------------------|
| A) Anand Mahindra | B) James Alix Michel |
| C) Pawan Chamling | D) Taja Halonen |

Q.147. Which day was observed across the world on 25 June 2016?

- | | |
|--------------------|---------------------|
| A) Day of Seafarer | B) Day of Surfers |
| C) Day of Sailors | D) Day of Struggles |

Q.148. ----- government on 26 July 2016 announced 60 lakh rupees cash special incentive for six sportswomen of the state who have qualified for the rio Olympics.

- | | |
|----------------|------------------|
| A) Kerala | B) Odisha |
| C) Maharashtra | D) Uttar Pradesh |

Q.149. Two pipes A and B can fill a tank in 10 hours and 15 hours respectively. Find the time taken to fill the tank when both the pipes are turned on simultaneously.

- | | |
|------------|------------|
| A) 6 hrs. | B) 5 hrs. |
| C) 30 hrs. | D) 12 hrs. |

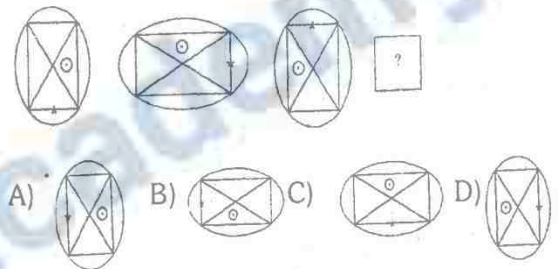
Q.150. Two cubes each of volume 216 cm³ are joined to form a cuboid. The total surface area of the resulting cuboid is (in cm²)

- | | |
|--------|--------|
| A) 120 | B) 360 |
| C) 300 | D) 240 |

Q.151. The sum of two numbers is 187 and their HCF is 17. What is the number of such pairs of numbers satisfying the above condition?

- | | |
|---------|----------|
| A) One | B) Four |
| C) Five | D) Seven |

Q.152. The next figure is



Q.153. Match the following:

- | | | | |
|------------------|--|---|---|
| List I | List II | | |
| A) Darwin | 1. Mutation | | |
| B) Mendal | 2. Law of inheritance of acquired characters | | |
| C) Lamarck | 3. Law of segregation | | |
| D) Hygo De Vries | 4. Origin of species | | |
| a | b | c | d |
| A) 4 | 3 | 2 | 1 |
| B) 2 | 1 | 3 | 4 |
| C) 3 | 4 | 2 | 1 |
| D) 1 | 3 | 4 | 2 |

Q.154. Match the List I with the List II and select the correct answer using the codes given below the list:

- | | |
|-----------------------------|---|
| List I | List II |
| A) Calcutta Congress (1928) | 1. Resolution on Fundamental Rights and Economic Policy |
| B) Lahore Congress (1929) | 2. Two Nation Theory |
| C) Karachi Congress | 3. Dominion status |

(1931)			
D) Ramgarh Congress			4. Complete Independence
(1940)			
a	b	c	d
A) 2	3	4	1
B) 4	3	2	1
C) 3	4	1	2
D) 1	3	4	2

Q.155. Consider the given figure of location of multipurpose projects in India. Match List I with List II and select the correct answer using the code given below list.



List I		List II	
Multipurpose Project Name		Dam name	
A) I		1. Bakra	
B) II		2. Gandhi Sagar	
C) III		3. Nagarjuna Sagar	
D) IV		4. Hirakud	
a	b	c	d
A) 2	1	4	3
B) 1	3	2	4
C) 4	1	2	3
D) 3	2	1	4

Q.156. Match List I with List II and select the correct answer using the codes given below the lists.

List I		List II	
Livestock product		Country	
A) Beef		1. Denmark	
B) Pork		2. Argentina	
C) Butter		3. Australia	
D) Wool		4. China	
a	b	c	d
A) 3	2	1	4
B) 2	4	1	3
C) 4	3	2	1
D) 1	4	3	2

Q.157. The conjugate base of NH_4^+ is

- A) NH_3 B) NH_4OH

- C) NH_2^- D) N_2H_4

Q.158. The isomer of BHC which has insecticidal property is

- A) α - isomer B) β - isomer
C) γ - isomer D) δ - isomer

Q.159. Galena is

- A) An oxide ore B) A sulphide ore
C) A halide ore D) A carbonate ore

Q.160. The value of $\frac{1}{3 + \frac{2}{2 + \frac{1}{2}}}$ is

- A) $\frac{5}{19}$ B) $\frac{19}{5}$
C) $\frac{4}{5}$ D) $\frac{5}{4}$

Q.161. If the angles of a triangle are in the ratio 1:3:5. Then the angles are

- A) $20^\circ, 100^\circ, 60^\circ$ B) $20^\circ, 60^\circ, 100^\circ$
C) $30^\circ, 60^\circ, 30^\circ$ D) $60^\circ, 30^\circ, 90^\circ$

Q.162. Which country on 16 June 2016 launched the new project 22220 nuclear icebreaker vessel dubbed 'Arkika'?

- A) US B) China
C) Russia D) Canada

Q.163. The President of India in June 2016 returned 3 bills to ----- Legislative Assembly for reconsideration.

- A) Karnataka B) Delhi
C) Bihar D) Manipur

Q.164. China has completed the production of the world's largest amphibious aircraft dubbed as the ----- .It was unveiled by the state owned AVIC in the southern port of Zhuhai.

- A) AG300 B) AG600
C) AG900 D) AG1200

Q.165. After the decline of Satavahanas, who emerged as important political power in South India.

- A) The Abhiras B) The Trikutakas
C) The Ikshvakus D) The Pallavas

Q.166. Match List I with List II and select the correct answer:

List I	List II
A) Warren Hastings	1. Treaty of Mangalore
B) Sir John Shore	2. Hafiz Rehmat Khan

- C) Dost Muhammad 3. Policy of Non-intervention
D) Lord Macartnay 4. Lord Auckland
- | | | | | |
|----|---|---|---|---|
| | a | b | c | d |
| A) | 2 | 3 | 4 | 1 |
| B) | 1 | 2 | 3 | 4 |
| C) | 3 | 4 | 1 | 2 |
| D) | 4 | 1 | 2 | 3 |

Q.167. Who was appointed as Honorary Consul of Germany in Hyderabad recently?

- A) BVR Mohan Reddy B) Krishna Bodanapu
C) Sushil Chandra D) Prajna Chowta

Q.168. Which of the following statements about National Development Council is/are wrong?

- I. National Development Council was set up in 1952.
II. National Development Council is concerned with social and economic policy.
III. It is a key institution in Centre-State relations.
IV. It consists of principal secretaries of all the ministries.

- A) I B) I and II
C) II and III D) IV

Q.169. 2MW, in-pile loop reactor installed for nuclear fuel studies is

- I. Dhruva II. Apsara
III. Circus IV. Kamini

Q.170. Which day was observed as 1 July 2016 across India

- A) National Technology Day
B) National water Day
C) National Mineral Day
D) National Doctor's Day

Q.171. The national rural employment guarantee scheme of India has provided an average of ----- of work to people who demanded in 2015-16

- A) 37.8 days B) 47.8 days
C) 57.8 days D) 67.8 days

Q.172. Name the ISRO's communication satellite that was launched from the spacecraft of Kourou in French Guiana?

- A) INSAT-4CR B) GSAT-18
C) GSAT-15 D) HAMSAT

Q.173. ----- Government has launched Quit India 2 Swaraaj to Suraaj Movement against various social ills during commemoration of Platinum Jubilee anniversary of the Quit India Movement.

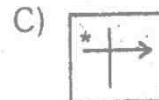
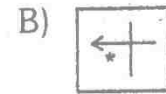
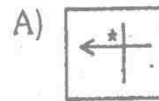
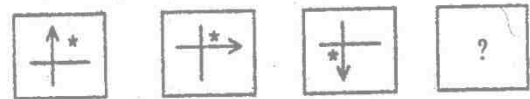
- A) Maharashtra B) Gujarat

- C) West Bengal D) Uttar Pradesh

Q.174. Who was appointed Brand Ambassador of Kerala's Haritha Keralam Project?

- A) Vijay Prakash B) Jency Anthony
C) KJ Yesudas D) Kiran Reddy

Q.175. The next figure in the following series:



D) None of these

Q.176. The value of $\frac{9^2 \times 18^4}{3^{16}}$ is

- A) $\frac{2}{3}$ B) $\frac{4}{9}$
C) $\frac{16}{81}$ D) $\frac{32}{243}$

Q.177. Consider the following statements:

Assertion (A) : Under British rule in Zamindari system, landlords charged heavy rents from tenants.

Reason (R) : Under Zamindari system population grew, villages decayed and demand for lands also grew.

- A) Both (A) and (R) are correct and (R) is correct explanation of (A)
B) Both (A) and (R) are correct and (R) is not correct explanation of (A)
C) (A) is true but (R) is false
D) (A) is false but (R) is true

Q.178. The Union cabinet of India on 24 August 2016 approved the introduction of the -----

- A) Power Tariff (Regulation) Bill, 2016
B) Surrogacy (Regulation) Bill, 2016
C) Cow Production (Regulation) Bill, 2016
D) Human Rights (Regulation) Bill, 2016

Q.179. Match the items in List I with List II and select the correct answer:

- | | |
|------------|---------------|
| A) Adenine | 1. Uracil |
| B) Thymine | 2. Sugar |
| C) Ribose | 3. Pyrimidine |
| D) RNA | 4. Purine |

List I

- A) Yakshagana
- B) Tamasha
- C) Raslila
- D) Yatra

Codes:

- | | a | b | c | d |
|----|---|---|---|---|
| A) | 2 | 1 | 4 | 3 |
| B) | 2 | 1 | 3 | 4 |
| C) | 3 | 2 | 4 | 1 |
| D) | 1 | 2 | 4 | 3 |

List II

- 1. Maharashtra
- 2. Karnataka
- 3. Bengal
- 4. Manipur

Q.191. Which of the following statements about 'Fundamental Right' is True?

- I. The Fundamental Rights are contained in Part IV of the constitution.
 - II. The Fundamental Rights are non-Justiciable.
 - III. The Fundamental Rights promote international peace.
 - IV. The Fundamental Rights guarantee the political freedom, to the citizens
- A) I and III B) I and II
C) III only D) IV only

Q.192. Match List I with List II:

List I

- A) 14-18 Articles
- B) 19-22 Articles
- C) 23-24 Articles
- D) 32 Article

List II

- 1. Right to Constitutional Remedies
- 2. Right against exploitation
- 3. Right to Freedom
- 4. Right to Equality

- | | a | b | c | d |
|----|---|---|---|---|
| A) | 4 | 3 | 2 | 1 |
| B) | 1 | 2 | 3 | 4 |
| C) | 2 | 3 | 4 | 1 |
| D) | 3 | 2 | 1 | 4 |

Q.193. The central Administrative Tribunals were set up on the recommendations of

- A) The Ministry of Law and Justice
- B) The Indian Law Commission
- C) The Sarkaria Commission
- D) The Administrative Reforms Commission

Q.194. Consider the following statement:

- 1. Rafael Nadal won men singles French open tennis tournament 2013
- 2. This is Nadal's maiden French open title.

Which of the statement given above is/are correct?

- A) 1 only B) 2 only
- C) both 1 and 2 D) neither 1 nor 2

Q.195. The World Happiness Report 2016 published by the UN ranks India at ----- position among 156 countries

- A) 74th B) 98th
- C) 118th D) 132nd

Q.196. The Indianh government on 16 June 2016 launched the ----- that can be used by anyone to register for volunteer work at government schools.

- A)Vidyamandir Mobile App
- B)Vidyanjali Mobile App
- C)Vidyalaya Mobile App
- D)Vidya Mobile App

Q.197. Who is the author of the autobiography entitled "My Journey"?

- A) Pranab Mukherjee B) A.P.J. Abdul Kalam
- C) Manmohan Singh D) Kabil Sibal

Q.198. The first direct bus service between ----- (Nepal) and New Delhi (India) was launched to connect South Asia's two important cities.

- A) Pokhara B) Kathmandu
- C) Biratnagar D) Patan

Q.199. Which of the following World Herritage sites was declared as the cleanest iconic place in India?

- A) Red Fort, New Delhi
- B) Qutb Minar and its Monuments , Delhi
- C) Buddhist Monuments at Sanchi,Mathya Pradesh
- D)Rani ki vav,Gujarat

Q.200. One of the coral reef areas identified for intensive conservation and management is

- A) Lakshadweep B) Pulicat
- C) Pamban D) Rameswaram